

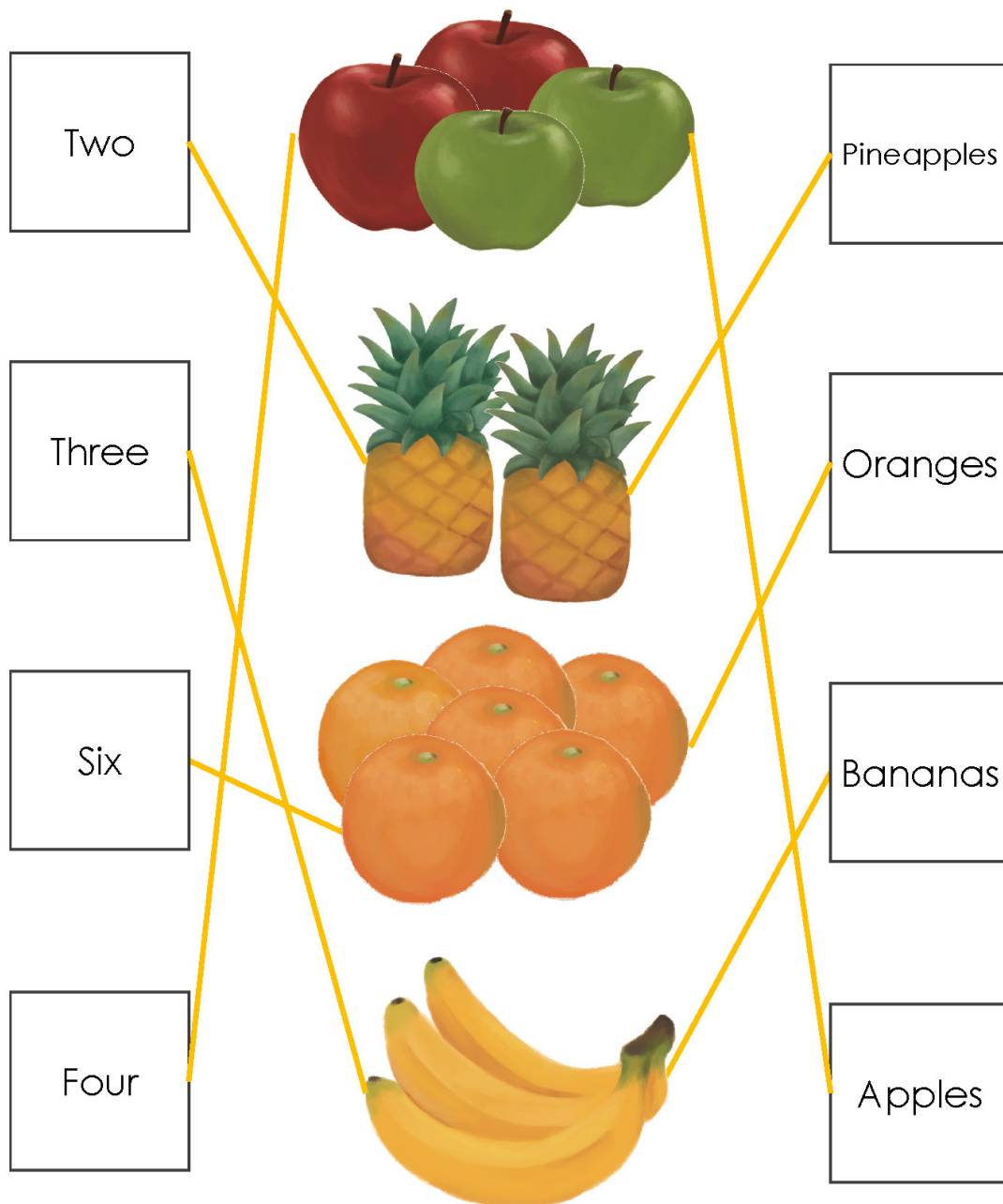
# 機會，是留給有準備的人！



Miss K. 把生活上所接觸的事物用相片記錄下來，  
讓家長可運用這本「通識思維百科」，  
透過與孩子的溝通、互動，  
加強孩子的多角度思維、表達能力及常識基礎，  
為升小面試作好準備。

數數水果，然後用線串連詞語和圖片。

Please count the fruits and match the correct words with the pictures.



請在圖中圈出下列的英文字。

Please circle the listed words in the word search below.

### School

Chair	Classroom	Playground	Table	Toilet
-------	-----------	------------	-------	--------

M P P D Q Z Z T S A E Q J  
 S O L S W S P X O Q D W G  
 U I J A E D L C S I W D D  
 U U H M C H A I R E L V S  
 F Y G N R F Y V B G Y E U  
 F T F B T G G N M J J K T  
 D F T V Y H R Q D O H K Y  
 C L A S S R O O M Y G J T  
 G D B C U J U F F D F A R  
 H S L X I K N F K Q D S E  
 J A E A O L D I L D S D W  
 K L D Q P P G C P P A Q Q  
 G G F W S V N E L O E E F

請完成以下的填字遊戲。

Please complete the following crossword.

1. 猩猩	2. 蝙蝠	3. 墨魚	4. 短吻鱷	5. 紅鶴
6. 駱駝	7. 驢	8. 蚱蜢	9. 倉鼠	10. 鷹

				1C						2B			
				H					A				
			4A	L	L	I	G	A	T	O	R		
						M							
						P							
			6C	A	M	E	L						
			M			E							
			I			F							
			N			I							
			8G	R	A	S	S	9H	O	P	P	E	R
			O			H		A					
								M					
								S					
								T					
								10E	A	G	L	E	
								R					

看看下圖，並把正確的英文字填到空格內。

Please match the jobs with the correct pictures.

Cook	Waiter	Driver	Fireman
Nurse	Doctor	Teacher	Policeman



Cook



Doctor



Fireman



Teacher



Nurse



Driver

數數以下物件，並在空格內寫上答案。

Please count the following items and write the numbers in the boxes.



The image shows three groups of items for counting. On the left, there are 8 pink bows arranged in two columns of four. In the middle, there are 3 green pencils arranged vertically. On the right, there is 1 doll wearing a green dress and hat. Below each group is a rectangular box containing the count: 8, 3, and 1 respectively.


請回答以下問題。

Please answer the following questions.

1. 鉛筆比布公仔(多/少)。  
There are (more/less) pencils than dolls.
2. 所有物件合起來共有 12 個。  
There are twelve items altogether.

用三條直線，把以下的六邊形分成六個三角形。

Use three straight lines to divide the following hexagon into six triangles.





## 《第二章》



數數動物，然後用線串連詞語和圖片。

Please count the animals and match the correct words with the pictures.

Two

Three

Four

One

Jellyfishes

Pig

Cats

Rabbits

請在圖中圈出下列的英文字。

Please circle the listed words in the word search below.

**Pets**

Bird	Cage	Cat
Hamster	Mouse	Pet
Dog	Fish	Rabbit

B I R D Q D B W E R T Y U

V C Z O A S D F G H J K K

B T I G I L S D T E Y I O

Z X E G A C C A T Z X C P

F I S H K L J H G F D S E

Q W E R T Y U I O P I T T

G H J H A M S T E R W E E

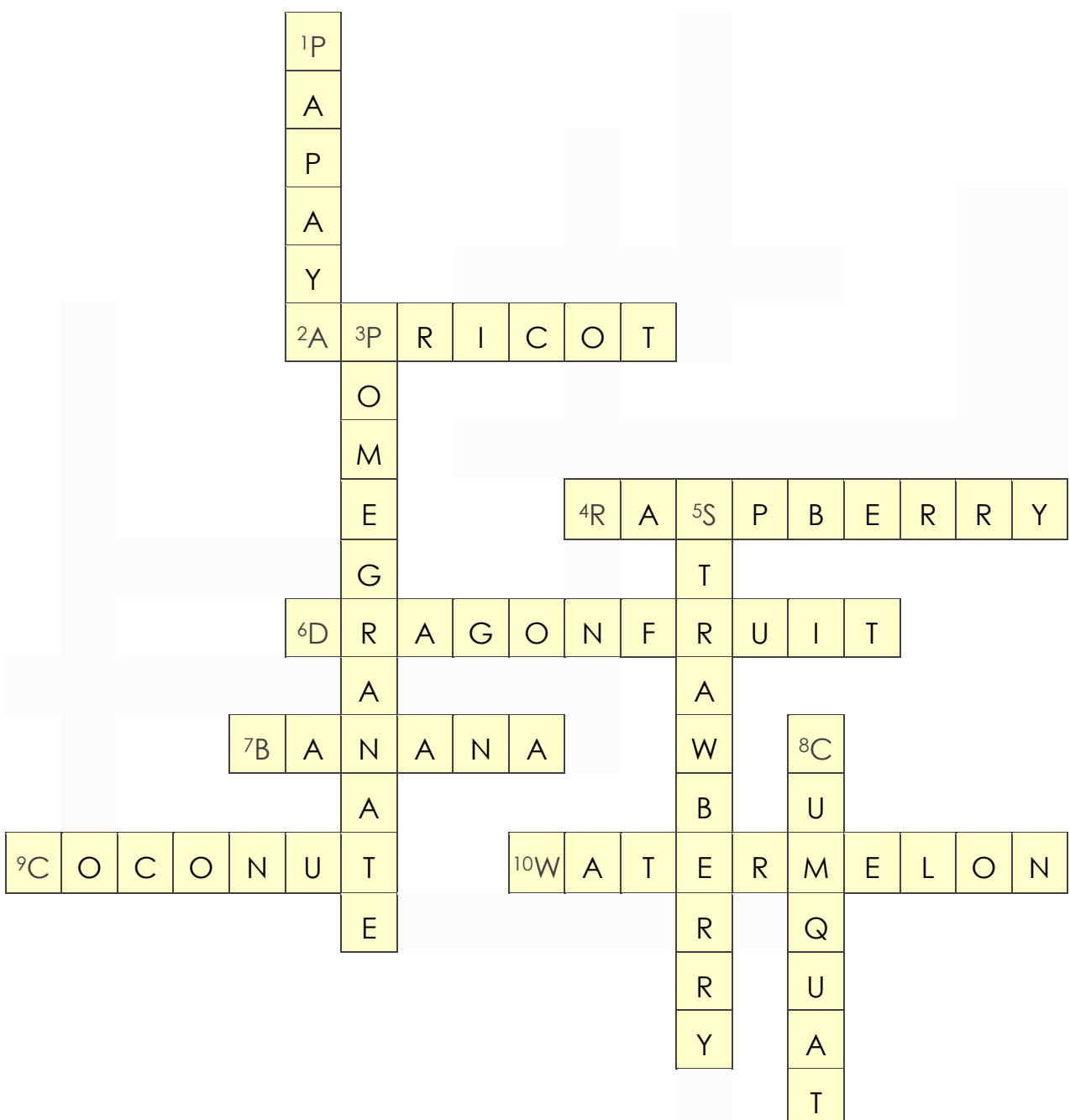
L J H N M O U S E M T R B

R A B B I T C G Y U H V N

請完成以下的填字遊戲。

Please complete the following crossword.

1. 木瓜	2. 杏	3. 石榴	4. 覆盆子	5. 草莓
6. 火龍果	7. 香蕉	8. 金橘	9. 椰子	10. 西瓜



看看下圖，並把正確的英文字填到空格內。

Please match the animals with the correct pictures.


Rabbit	Lion	Elephant	Kangaroo
Sheep	Zebra	Tiger	Dolphin



Rabbit

Zebra

Dolphin



Lion

Elephant

Goat

數數以下物件，並在空格內寫上答案。

Please count the following items and write the numbers in the boxes.



8
---

1
---

3
---

請回答以下問題。

Please answer the following questions.

1. 書本比橡皮(多/少)。  
There are (**more**/less) books than rubbers.
2. 所有物件合起來共有 **12** 個。  
There are **twelve** items altogether.

用五條直線，把以下的星形分成五個三角形。

Use five straight lines to divide the following star into five triangles.

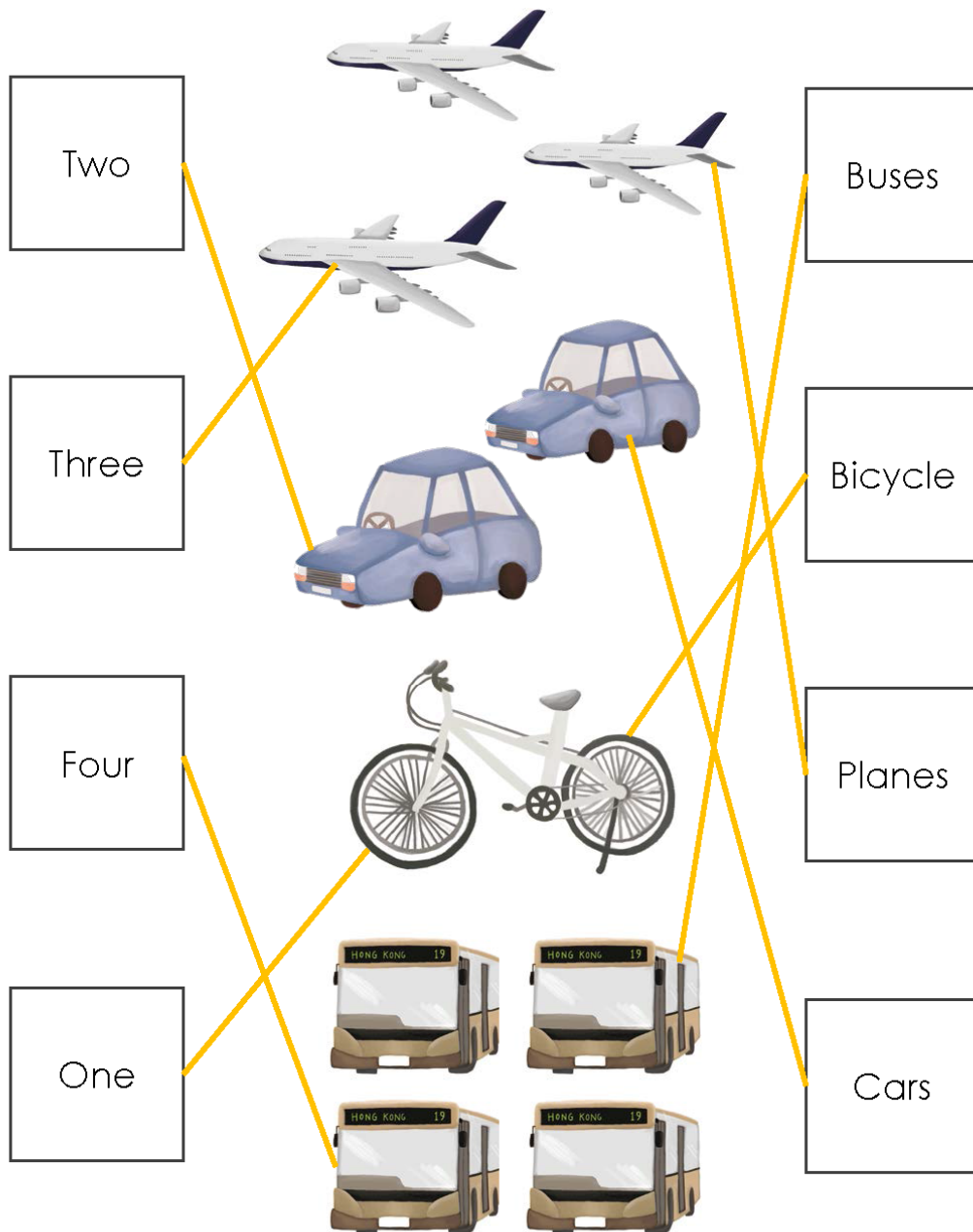




## 《第三章》

數數物件，然後用線串連字和圖。

Please count the objects and match the words with the pictures.





請在圖中圈出下列的英文字。

Please circle the listed words in the word search below.

### Solar

Air	Earth	Gravity
Planets	Rotate	Orbit

	A	Q	W	E	S	T	E	N	A	L	P	
A	I	Y	U	I	H	I	B	C	G	X	J	R
G	R	A	V	I	T	Y	Y	U	I	O	P	O
S	V	B	N	M	E	R	L	K	J	I	T	T
F	Y	Y	E	E	E	S	H	B	M	M	I	A
H	Y	D	A	S	V	A	T	E	P	L	B	T
J	J	H	R	G	F	D	S	A	D	J	R	E
K	Z	C	T	C	B	M	W	B	R	C	O	O
	L	U	H	F	R	F	E	S	W	H	K	
				G	D	T	Y	W				
				N	B	V	C	F				
				U	I	T	O	V				
				Q	E	R	T	B				

請完成以下的填字遊戲。

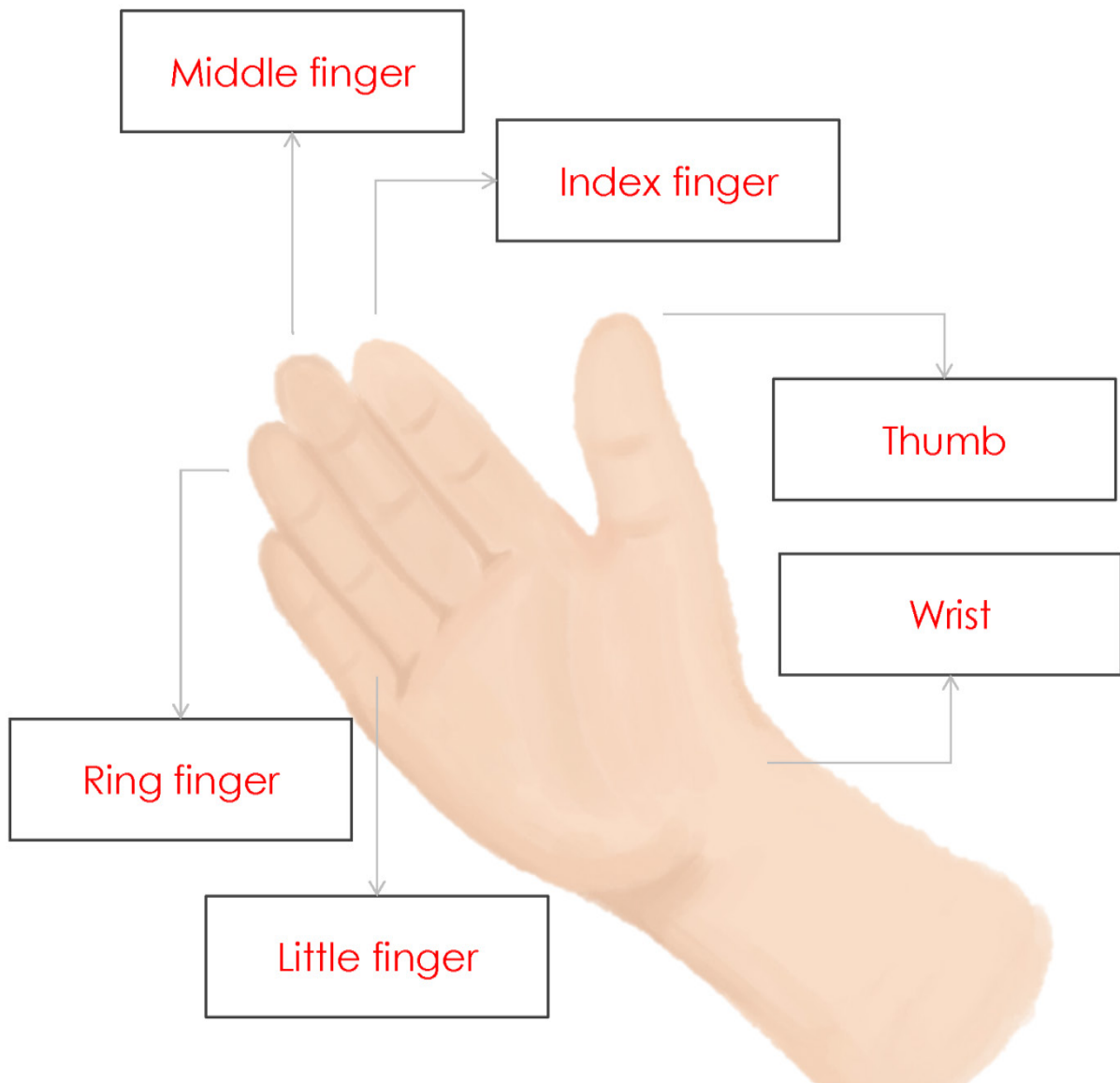
Please complete the following crossword.

1. 襪子	2. 褲子	3. 手套	4. 靴子	5. 禦寒耳罩
6. 毛衣	7. 圍巾	8. 冷帽	9. 外套	10. 背心

請為下圖配上正確的英文字。

Please match the words with the correct parts of the picture.

Thumb	Index finger	Middle finger
Ring finger	Little finger	Wrist



數數以下物件，並在空格內寫上數字。

Please count the following items and write the numbers in the boxes.



2

3

1


請回答以下問題。

Please answer the following questions.

1. 熱狗的數量是蛋糕數量的 3 倍。  
The amount of hot dogs is **three** times more than that of the cake.
2. 所有物件合起來共有 6 個。  
There are **six** items altogether.

請找出下列圖案的對稱軸。

Please identify the axes of symmetry of the following figures.





## 《第四章》

數數物件，然後用線串連字和圖。

Please count the objects and match the correct words with the pictures.

Diagram illustrating a matching exercise. On the left, there are four boxes containing the numbers: Six, One, Five, and Two. On the right, there are four boxes containing the words: Bicycles, Woods, Leaves, and Butterfly. In the center, there are illustrations of six logs, two leaves, one butterfly, and six bicycles. Yellow lines connect the numbers to the correct objects: Six to logs, One to butterfly, Five to bicycles, and Two to leaves.

請在圖中圈出下列的英文字。

Please circle the listed words in the word search below.

### Continents

Africa	Antarctica	Asia
North America	South America	Europe

E E E B  
 A Q R E C E S S A C E  
 A I T E A C H E R S L J L  
 N O R T H A M E R I C A P O L  
 R S O U T H A M E R I C A N I  
 T F Y Y E E E N H B E S I A O  
 8 H N A S I A C T E I M B T P  
 A N T A R C T I C A R A R E E  
 F Z C T C B B W B F T O O  
 R U H F E U R O P E E  
 I H S V X T E P S  
 C E S H B S H  
 A S A V I  
 F R T  
 Y



請完成以下的填字遊戲。

Please complete the following crossword.

1. 飛機	2. 火車	3. 船	4. 電單車	5. 校巴
6. 氣墊船	7. 直昇機	8. 貨車	9. 汽車	10. 單車

			1A								
2T	R	A	I	N							
			R								
			P								
			L								
	3B	O	A	T				4M			
			N		5S			O			
6H	O	V	E	R	C	R	A	F	T		
					H				O		
7H	E	L	I	C	O	P	8T	E	R		
					O		R		9C	A	R
					L		U		Y		
					10B	I	C	Y	C	L	E
					U		K		L		
					S				E		

看看下圖，並把正確的英文字填到空格內。

Please match the countries with the correct flags.


South Korea	Turkey	Denmark
Japan	Finland	Canada



Turkey

Denmark

South Korea



Japan

Finland

Canada

數數以下物件，並在空格內寫上答案。

Please count the following items and write the numbers in the boxes.



2

4

8

請回答以下問題。

Please answer the following questions.

1. 桌子比椅子(多/少)。  
There are (more/less) desks than chairs.
2. 所有物件合起來共有 14 個。  
There are fourteen items altogether.

請找出下列圖案的對稱軸。

Please identify the axes of symmetry of the following graphs.

